

Mrs. Daly's Grade 4/5 Class


Learning Goals June 15- 19<sup>th</sup>

L.A./Science/Social Studies

- Read about fishing , by CBC Kids. <https://www.cbc.ca/kidscbc2/the-feed/twelve-hundred-fish-species-in-canada-more-fishing-facts>

Write a paragraph about your fishing experience. What kind of fish did you catch? What kind of rod did you use? Where did you fish at? If you do not have an experience you could talk about camping or outdoor activities.

- <https://www.youtube.com/watch?v=wyRy8kowsM8> Watch this video about properties of matter.
- Can you write an example of different types of matter? Write 2-3 sentences.



- <https://www.educatorsforpeacefulclassroomsandcommunities.org/resources/peace-tools/the-story-of-the-talking-stick/>

Read about the talking stick from the link above. Now can you make your own talking stick.

You will need a piece of wood, beads, yarn or leather, you can also use fur. Get creative!

Math


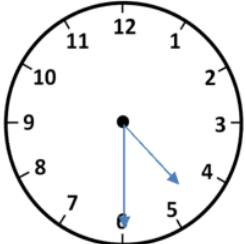
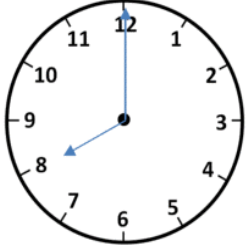

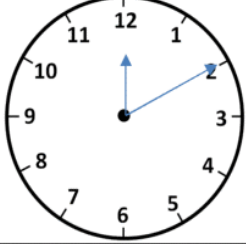
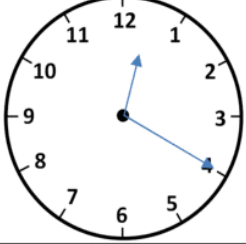
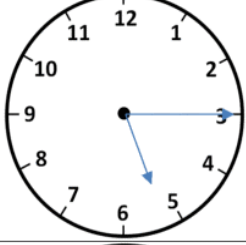
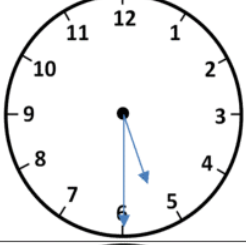


Name \_\_\_\_\_

Date \_\_\_\_\_



## ELAPSED TIME CLOCK WORKSHEET 1

Work out the elapsed time between the times on the two clocks.

	TO		_____ minutes
	TO		_____ minutes
	TO		_____ minutes
	TO		_____ minutes
	TO		_____ minutes

Measurement word problems:

Read and answer each question:

1. Ashley's teacher asked her to bring 3 pieces of yarn, each no shorter than 0.8 m, for an art project. Ashley found a piece of old yarn at home that is 280 cm long.

Does she have enough yarn to bring to school?

2. The height of the tree is 4.2 m. Jack's ladder is 2.8 m tall. Jack is 179 cm tall.

Compared to the tree, how much taller (measured in cm) is Jack if he is standing at the top of the ladder?